


Name: _____

Date: _____

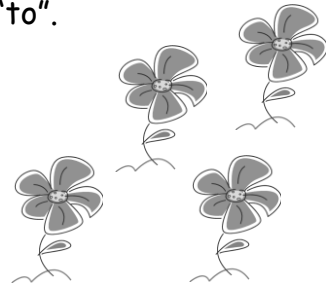
Identifying Ratios

Directions: Write the correct ratio.

1) Write a ratio of balloons to airplanes using a colon.




2) Write a ratio of leaves to flowers using the word "to".




3) Write a ratio of buttons with only two holes to all buttons using a fraction bar.



4) Write a ratio of cookies to all snacks using a colon.




5) Write a ratio of bones to ears using the word "to".



6) Write a ratio of doctor's hands to patients using two different formats.



7) Write a ratio of one-eyed aliens to all aliens using two different formats.



8) Write a ratio of houses to windows using two different formats.




Key

Identifying Ratios

Directions: Write the correct ratio.


1) Write a ratio of balloons to airplanes using a colon.

3:2



2) Write a ratio of leaves to flowers using the word "to".

4 to 4



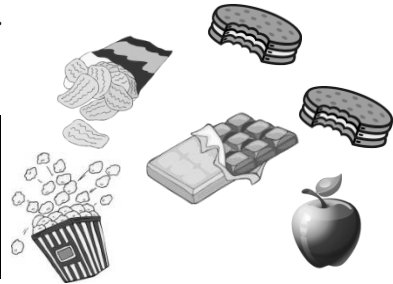
3) Write a ratio of buttons with only two holes to all buttons using a fraction bar.

$\frac{4}{6}$




4) Write a ratio of cookies to all snacks using a colon.

2:6



5) Write a ratio of bones to ears using the word "to".

5 to 10



6) Write a ratio of doctor's hands to patients using two different formats.

2 to 6


2:6 $\frac{2}{6}$



7) Write a ratio of one-eyed aliens to all aliens using two different formats.

2 to 5

2:5 $\frac{2}{5}$



8) Write a ratio of houses to windows using two different formats.

2 to 3

2:3 $\frac{2}{3}$

