

# Comparing Integers

Name \_\_\_\_\_

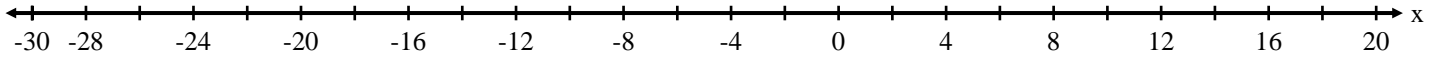
1.



In which situation would you have the least amount of money left in your pocket? The greatest amount of money?

- A. You just earned \$10
- B. You just earned \$20
- C. You just spent \$10
- D. You just spent \$20

Plot each amount on the number line below.



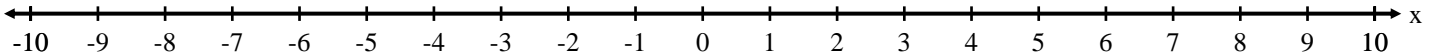
2.



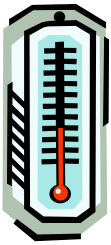
In which situation would you be at the lowest point? The highest point?

- A. You climb 6 feet up the mast
- B. You dove 6 feet under the water.
- C. You are the water surface.
- D. You are snorkeling 3 feet under.

Plot each depth on the number line below.



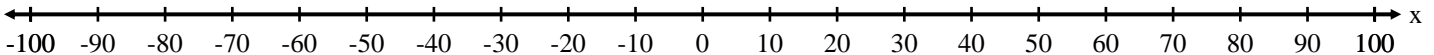
3.



In which situation would you feel hottest? The coldest?

- A. Your average body temperature is 37° C.
- B. You are outside in 0°.
- C. You have a fever of 100° F.
- D. You are in Alaska at 65° below 0.

Plot each temperature on the number line below.



4.



In a football game, which would be the best play? The worst play?

- A. You lose 3 yards.
- B. You run for a 12 yard gain.
- C. You drop the ball 10 yards behind the line of scrimmage.
- D. You ran the ball 15 yards.

Plot each gain or loss on the number line below.

